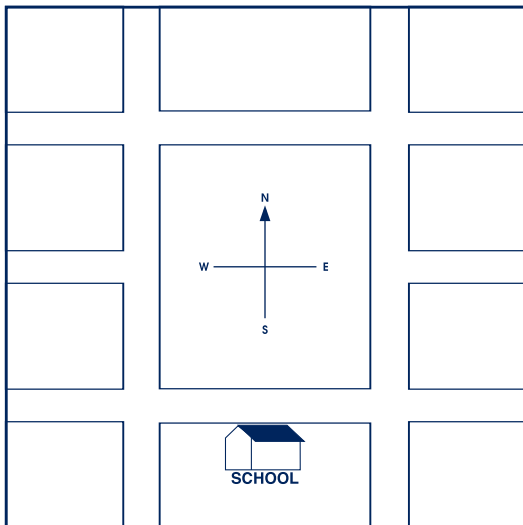


Approach: Station
 Focus: Drawing a map
 Resources: Map in work book

Questions / instructions:

Kate said "My school is on Main Street. I walk west along Main Street to Hills Street. Then I walk north along Hills Street. I go past Frame Street on my left. Pioneer Street crosses over Hills Street. I turn right into Pioneer Street. My house is the second house on the left on Pioneer Street."



- Write in the names of the streets that Kate walks along to get from school to home.

	% response 2007 ('03)	
	year 4	year 8
Correctly marked: Main Street	62 (54)	82 (80)
Hills Street	47 (47)	82 (79)
Frame Street	24 (27)	62 (58)
Pioneer Street	40 (40)	79 (76)

- Draw Kate's house on the map.
[left (top) side of Pioneer St, middle section]

drawn in correct position, not on the corner	22 (9)	45 (40)
drawn in generally correct position, but on the corner	4 (19)	8 (15)

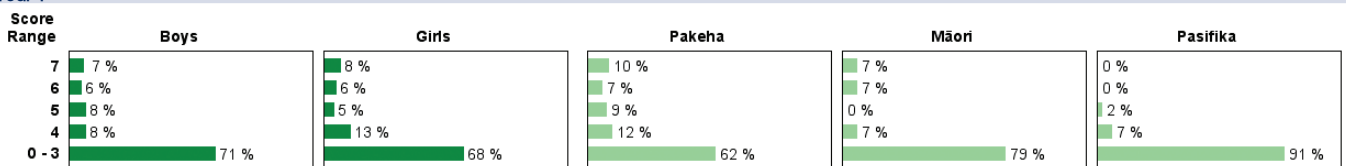
- Draw a line to show where Kate walks to get from school to home.

line showed correct route	25 (22)	61 (51)
---------------------------	---------	---------

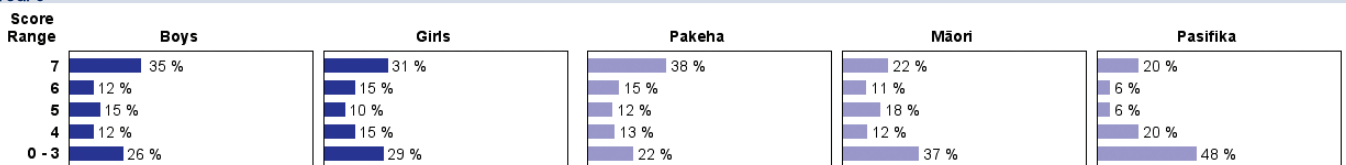
Total score: 7	8 (3)	33 (26)
6	6 (10)	13 (18)
5	6 (5)	13 (5)
4	10 (12)	14 (17)
0-3	70 (69)	28 (33)

Subgroup Analyses:

Year 4



Year 8



Commentary:

Year 8 students were moderately successful in following the directions and marking a route on a simple map. Year 4 students had much more difficulty with the task. Whereas 61% of the year 8 students could trace the route that the student took from school to her house, only one quarter of year 4 students could do so. There was little change between 2003 and 2007. Boys and girls performed similarly. Pasifika students had the least success with this task.