

Approach: Station

Level: Year 8

Focus: Comparing weights.

Resources: 6 pictures of fish on weighing scales.

Questions/instructions:

% responses

Here are the weights of fish.

y8

Find the 3 heaviest fish and write down their weights.

heaviest:

4kg

92

4

4

2nd heaviest:

3.3kg

15

3.3

1

3.2kg

30

3.2

2







3rd heaviest:

2.8kg

38

2.8

2



Commentary

Most students recorded the units (kg) as well as the number.